




Maths Challenge

Thursday - Subtraction not crossing 10

Problem 1

Annie, Tommy and Alex are working out which calculation is represented below.

First	Then	Now
		

$$17 - 17 = 0$$



Annie



Tommy

$$17 - 0 = 17$$

$$0 - 17 = 17$$



Alex

Can you work out who is correct?
Explain why.